



E-book Code:
RENZ7003



RELIEF TEACHERS' SURVIVAL HANDBOOK (BOOK 3: AGES 10-12)

By David J Cohen

Illustrated by Terry Allen. © Ready-Ed Publications - 2002.
Published by Ready-Ed Publications (2002) P.O. Box 276 Greenwood W.A. 6024
Email: info@readyed.com.au Website: www.readyed.com.au

COPYRIGHT NOTICE

Permission is granted for the purchaser to photocopy sufficient copies for non-commercial educational purposes. However, this permission is not transferable and applies only to the purchasing individual or institution.

ISBN 1 86397 452 0

Contents

Relief Teacher Report Sheet2

Introduction4, 5

Language Activities

Writing Instructions6

Character grid7

Book Review8

Pass It On9

Diary Writing10

Where Do Ideas Come From?11

Telephone Talk12

Postcards Keep Us In Touch13

Word Skills Activities

Find Smaller Words14

Abbreviations15

Calligrams16

Criss-Cross Words17

Food and Drink Word Search18

Christmas Word Search19

Library Skills Activities

Library Research 120

Library Research 221

All About Books22

Maths Activities

Mental Maths23

Roman Numerals24

Jumbo Maths Page25

Number Search26

Graphing Information27

Break the Code28

Opposites Attract29

Times Table Chart30

Science Activities

Animal Classification31

Adaptations 132

Adaptations 233

A Trip to Mars 134

A Trip to Mars 235

The Planets36

World Activities

Roman Invasion 137

Roman Invasion 238

The Muslim Place of Worship39

The Olympic Games40

The Olympics: Q & A41

Newspaper Article Template42

Technology & Design Activities

Computers43

Design Your Own Computer44

Instructions for the Computer45

Favourite Web Sites46

Design of Your School47

Mobile Telephone Advertisement48

Art Activities

Vincent Van Gogh49

Vincent Van Gogh: Q & A50

Easy Art Lessons 151

Easy Art Lessons 252

P.E. Activities

P.E. Games To Play 153

P.E. Games To Play 254

Music & Games Activities

Song Writing55

Classroom Activities & Games 156

Classroom Activities & Games 257

Board Game58

Dice Net59

Answers60

Name: _____

Book Review

★ Select a fiction book or story to complete this book review.

Title of book: _____

Author: _____

Illustrator: _____

Setting:

Who are the main characters? _____

When did the story take place? _____

Where did the story take place? _____


Story outline:

What happened at the beginning of the story?

What happened in the middle of the story?

What happened at the end of the story?

Draw a picture from the story.



Describe an exciting part of the story in your own words. _____

What rating do you give this book?     

Abbreviations

Words that have been shortened are called *abbreviations*. Why do you think people use abbreviations?

★ Match up these abbreviations:

Co.	Please Turn Over
E.g.	Approximately
Approx	Company
PTO	For example

★ Organisations often abbreviate their names. Match up these abbreviations:

EU	International Business Machines
NATO	Prime Minister
WWW	United Kingdom
IBM	North Atlantic Treaty Organisation
UN	European Union
UK	World Wide Web
PM	United Nations

★ See how many of these you know and can work out:

USA	
QANTAS	
	Australian and New Zealand Army Corp
TV	
ASAP	
	To Be Announced
	Federal Bureau of Investigation
BBC	
ABC	
	World Health Organisation
	Personal Computer
GPO	


★ Do you know any other abbreviations? On the back of this page, write down as many as you can think of.

Food and Drink Word Search

M	W	E	C	O	R	N	E	K	C	I	H	C
M	A	N	G	O	I	L	A	L	O	C	C	A
I	T	S	C	B	F	N	T	I	J	A	A	K
N	E	P	C	E	H	W	E	M	Z	P	R	E
T	R	A	D	A	E	A	A	Z	I	P	R	N
E	G	G	S	N	R	R	I	E	N	L	O	U
L	K	H	H	S	B	P	E	A	S	E	T	T
I	E	E	C	S	S	A	O	L	I	V	E	S
M	B	T	A	O	Z	S	V	N	B	B	Q	U
A	A	T	N	U	R	T	C	H	E	E	S	E
L	B	I	I	P	E	A	L	A	M	B	E	A
A	S	R	P	O	I	A	N	O	C	A	B	F
S	A	U	S	A	G	E	T	N	O	M	E	L



★ Tick the words you find.



apple

bbq

bacon

beans

beef

carrot

cake

cheese

chicken

cola

corn

eat

eggs

herbs

kebabs

lamb

lemon

mango

mascarpone

milk

mint

nuts

oil

olives

pasta

peas

pie

pizza

prawn

salami

sausage



soup

spaghetti

spinach

tea

water



Name: _____

Jumbo Maths Page

☆ Complete these sums. Always check your answers.

$$\begin{array}{r} 1. \quad 36 \\ + 13 \\ \hline \\ \hline \end{array}$$

$$\begin{array}{r} 45 \\ + 33 \\ \hline \\ \hline \end{array}$$

$$\begin{array}{r} 67 \\ + 12 \\ \hline \\ \hline \end{array}$$

$$\begin{array}{r} 235 \\ + 123 \\ \hline \\ \hline \end{array}$$

$$\begin{array}{r} 2. \quad 604 \\ + 111 \\ \hline \\ \hline \end{array}$$

$$\begin{array}{r} 99 \\ + 10 \\ \hline \\ \hline \end{array}$$

$$\begin{array}{r} 842 \\ + 157 \\ \hline \\ \hline \end{array}$$

$$\begin{array}{r} 398 \\ + 101 \\ \hline \\ \hline \end{array}$$

$$\begin{array}{r} 3. \quad 378 \\ + 267 \\ \hline \\ \hline \end{array}$$

$$\begin{array}{r} 587 \\ + 447 \\ \hline \\ \hline \end{array}$$

$$\begin{array}{r} 986 \\ + 338 \\ \hline \\ \hline \end{array}$$

$$\begin{array}{r} 509 \\ + 511 \\ \hline \\ \hline \end{array}$$

$$\begin{array}{r} 4. \quad 45 \\ - 39 \\ \hline \\ \hline \end{array}$$

$$\begin{array}{r} 67 \\ - 28 \\ \hline \\ \hline \end{array}$$

$$\begin{array}{r} 22 \\ - 19 \\ \hline \\ \hline \end{array}$$

$$\begin{array}{r} 78 \\ - 9 \\ \hline \\ \hline \end{array}$$

$$\begin{array}{r} 5. \quad 743 \\ - 544 \\ \hline \\ \hline \end{array}$$

$$\begin{array}{r} 606 \\ - 515 \\ \hline \\ \hline \end{array}$$

$$\begin{array}{r} 983 \\ - 779 \\ \hline \\ \hline \end{array}$$

$$\begin{array}{r} 228 \\ - 99 \\ \hline \\ \hline \end{array}$$

$$\begin{array}{r} 6. \quad 8948 \\ - 248 \\ \hline \\ \hline \end{array}$$

$$\begin{array}{r} 4583 \\ - 1789 \\ \hline \\ \hline \end{array}$$

$$\begin{array}{r} 8554 \\ - 7785 \\ \hline \\ \hline \end{array}$$

$$\begin{array}{r} 54644 \\ - 14935 \\ \hline \\ \hline \end{array}$$

$$\begin{array}{r} 7. \quad 434 \\ \times 2 \\ \hline \\ \hline \end{array}$$

$$\begin{array}{r} 843 \\ \times 2 \\ \hline \\ \hline \end{array}$$

$$\begin{array}{r} 726 \\ \times 2 \\ \hline \\ \hline \end{array}$$

$$\begin{array}{r} 999 \\ \times 2 \\ \hline \\ \hline \end{array}$$

$$\begin{array}{r} 8. \quad 7083 \\ \times 3 \\ \hline \\ \hline \end{array}$$

$$\begin{array}{r} 7054 \\ \times 4 \\ \hline \\ \hline \end{array}$$

$$\begin{array}{r} 7242 \\ \times 5 \\ \hline \\ \hline \end{array}$$

$$\begin{array}{r} 8646 \\ \times 3 \\ \hline \\ \hline \end{array}$$

A Trip To Mars 1

The race is on to send people to Mars. There are people who think this could happen by the year 2010. As Mars is a long way away, a round trip could take 18 months. This is a long time for people to be in space. They would be away from family and friends and not be living a normal life at all. These are just two of the many problems scientists must help overcome before a trip to Mars is possible.

- ☆ Imagine NASA has asked you to think of problems these space travellers might encounter on their trip. Make a list of them and possible solutions.
You may want to work in a group.

Problem	Possible Solutions