



E-book Code:
RENZ7001



RELIEF TEACHERS' SURVIVAL HANDBOOK (BOOK 1: AGES 6 - 8)

By David J Cohen

Illustrated by Terry Allen. © Ready-Ed Publications - 2002.
Published by Ready-Ed Publications (2002) P.O. Box 276 Greenwood W.A. 6024
Email: info@readyed.com.au Website: www.readyed.com.au

COPYRIGHT NOTICE

Permission is granted for the purchaser to photocopy sufficient copies for non-commercial educational purposes. However, this permission is not transferable and applies only to the purchasing individual or institution.

ISBN 1 86397 450 4

Contents

Relief Teacher Report Sheet	2	Living or Non-Living?	32
Introductory Notes	4, 5	Things That Move	33
Names	6	Where Does Food Come From?	34
<u>Language Activities</u>		How to Grow Plants	35
Three Billy Goats Gruff Story	7, 8	Pets	36
Three Billy Goats Gruff 1	9	All About Dogs	37
Three Billy Goats Gruff 2	10	Dog Word Search	38
Three Billy Goats Gruff 3	11	Cats	39
Detective McMorse	12	<u>Society & Environment Activities</u>	
Alan the Alien	13	On the Island	40
Following Instructions	14	Colour in the Easter Bunny	41
On the Farm	15	<u>Health Activities</u>	
<u>Word Skills Activities</u>		Healthy Eating and Drinking	42
Jumbled Sentences	16	Making Food	43
Driving Around	17	The Senses	44
Word Search	18	Brushing My Teeth	45
Animal Word Search	19	<u>Technology & Design Activities</u>	
<u>Library Skills</u>		Computers	46
Parts of a Book	20	Design Your Own Super Bed	47
<u>Maths Activities</u>		<u>Art Activities</u>	
Colour In	21	Easy Art Lessons 1	48
Mental Maths	22	Easy Art Lessons 2	49
How Many Are Coloured In?	23	<u>Physical Education Activities</u>	
Odd and Even	24	Sport Match-Up	50
What Comes Next?	25	What Can You Do?	51
Shapes	26	P.E. Games To Play 1-5	52-56
What Shape Is It?	27	<u>Music Activities</u>	
<u>Science Activities</u>		Guess This Sound 1	57
Mystery Object	28	Guess This Sound 2	58
On the Beach	29	Classroom Activities & Games 1	59
What Is It Made Of?	30	Classroom Activities & Games 2	60
Count the Sea Creatures	31		

Name: _____

Language _____

Alan The Alien and His Space Dog

Alan the Alien and his Space Dog have landed on planet Earth.


☆ Colour Alan and the Space Dog the right colours.
Draw a lead for the Space Dog.

Alan has green eyes
Alan has purple arms
Alan has orange feet

Alan has a red face
Alan has blue legs

Space Dog has a blue tail
Space Dog has green ears

Space Dog has a yellow body
Space Dog has black legs



☆ On the back of this paper, draw another space ship for Alan and Space Dog to fly home in.

On the Farm

★ Look at this map. Complete the tasks and answer the questions.

1. Colour the barn red.
2. Draw two ducks in the pond.
3. What is next to the tree? _____
4. How many cars can you see on the farm? _____
5. Where is the tractor? _____
6. How many cows can you see? _____
7. Draw trees on top of the hills.
8. Draw a path from the house to the chicken coop.



Animal Word Search

★ Find the animals. Tick them when you find them.


Words to find:

- cat
- deer
- dog
- fish
- fox
- hen
- monkey
- rat
- snake
- pig

f	i	s	h	x	d
o	r	p	e	s	o
x	a	i	n	n	g
e	t	g	c	a	t
d	e	e	r	k	p
m	o	n	k	e	y

★ Complete these sentences using the animal words.

1. The _____ laid an egg every day.
2. A _____ looks like a dog with a big bushy tail.
3. "Oink, oink, oink," said the _____.
4. The _____ sleeps in the kennel.
5. _____ live in the ocean.
6. "Hisssssssssss," said the _____.
7. Our family saw a _____ at the zoo.



★ On the back of this page, draw pictures of the animals you found in this word search.

Name: _____

Maths

Mental Maths

Score:

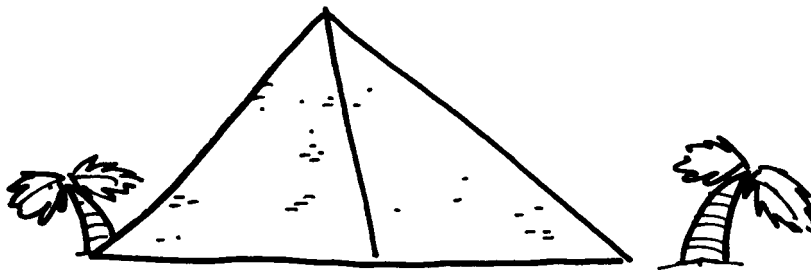
1. $10 + 8 =$ _____
2. What is 5 more than 10? _____
3. What is 6 more than 10? _____
4. What is 10 more than 1? _____
5. What comes next? 1, 2, 3, 4 _____
6. What comes next? 5, 10, 15 _____
7. Double 10. _____
8. Double 5. _____
9. What is half of 40? _____
10. What is half of 10? _____
11. $10 - 5 =$ _____
12. $12 - 2 =$ _____
13. What is 3×3 ? _____
14. What is 2×2 ? _____
15. If 2 people owned 5 toys, how many did they own altogether?

16. If 4 people owned 2 pets each, how many did they own altogether? _____
17. What is the number between 1 and 3? _____
18. What is the number between 15 and 17? _____
19. How many days in a week? _____
20. How many weeks in a year? _____




What Shape Is It?

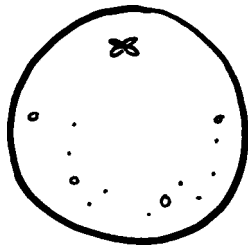
☆ Look at these pictures. Put these objects into the correct columns.




pyramid




picture frame




orange



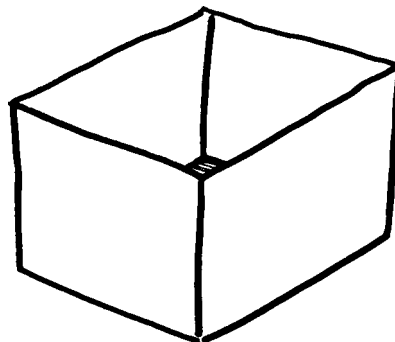
dice




sail



Earth



box



basketball

triangular	round	square

☆ On the back of this page, draw different things that are small, round and large.